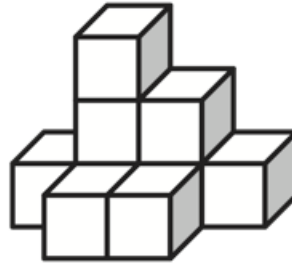


MA.4.G.5.3 (Form B) use after lesson 13.5

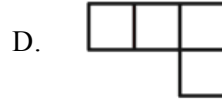
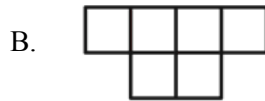
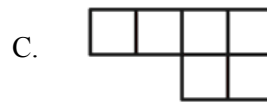
Multiple Choice

Identify the choice that best completes the statement or answers the question.

_____ **1** Wyatt built this object with wooden blocks.

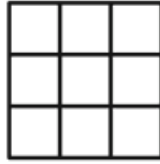


He drew a picture to show what the object looks like from the top. Which could be Wyatt's picture?

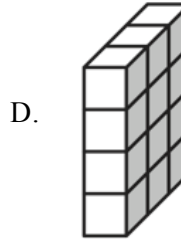
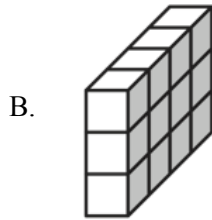
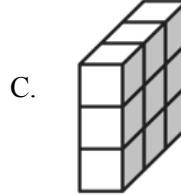
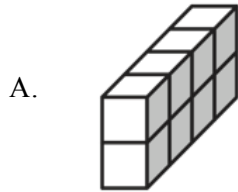


Name: _____

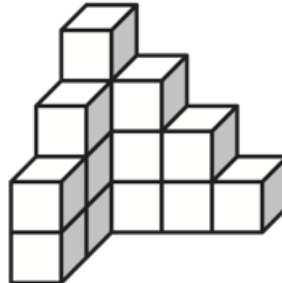
_____ **2** Serena built a three-dimensional object out of cubes. Then she drew this picture to show what the object looks like from the side.



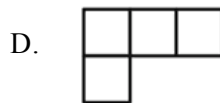
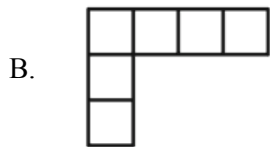
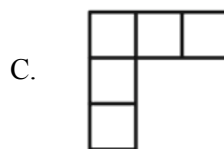
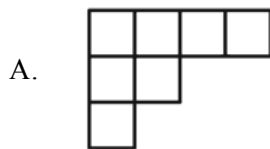
Which could be Serena's object?



_____ **3** Connie used this three-dimensional object to form one corner of a model castle.

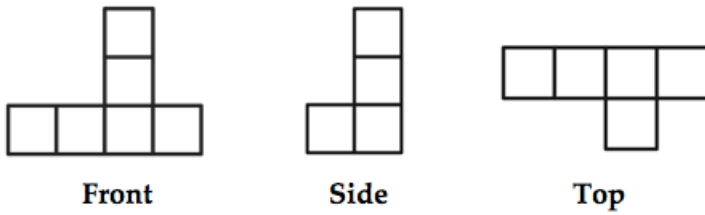


Which is a view of the base of Connie's object?

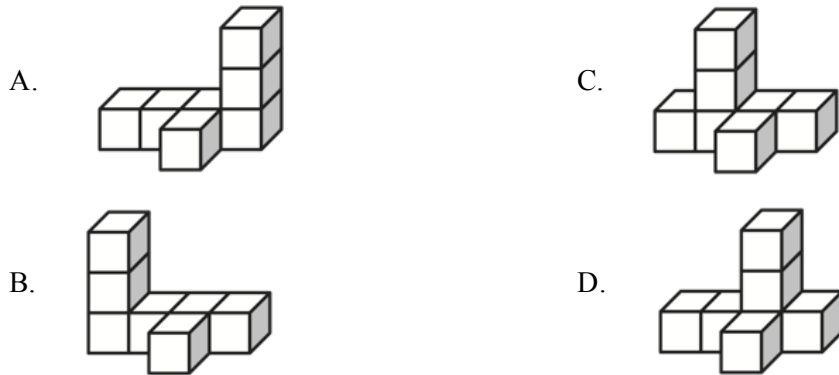


Name: _____

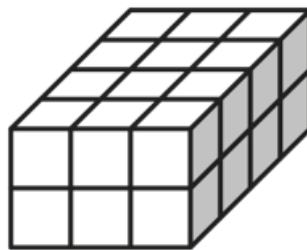
4 Leslie built an object with cubes. She looked at the object from the front, the side, and the top. She drew the following pictures to show these views.



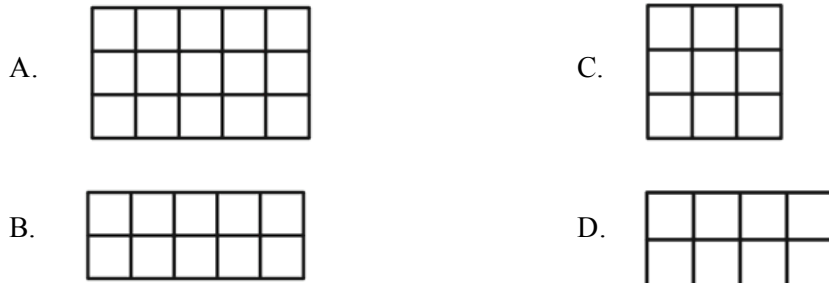
Which could be the object Leslie built?



5 Bethany used blocks to make a model of her school. She built this object to show the library.



Which is a side view of the object Bethany built?



MA.4.G.5.3 (Form B) use after lesson 13.5

Answer Section

MULTIPLE CHOICE

- | | | |
|----------|--------|--------|
| 1 | ANS: B | PTS: 1 |
| 2 | ANS: C | PTS: 1 |
| 3 | ANS: B | PTS: 1 |
| 4 | ANS: D | PTS: 1 |
| 5 | ANS: D | PTS: 1 |